

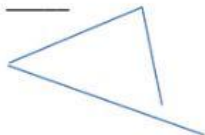
Name: _____

Date: _____

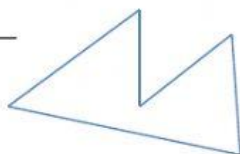
"POLYGON"

A. Identify if the figure is a polygon or not. Write "P" if polygon and write "N" if not.


1. _____



2. _____



3. _____



4. _____



5. _____



B. Complete the table by classifying the given polygon and identify if it's a regular or irregular polygon.

Figure	Name of polygon	Types of Polygon
1.		
2.		
3.		
4.		
5.		