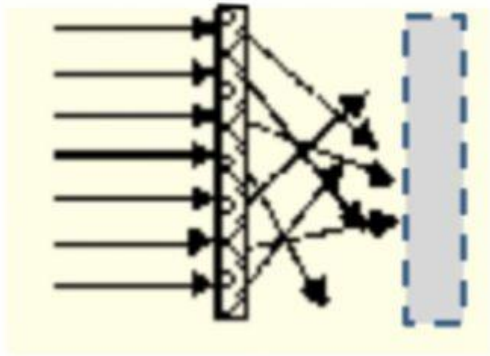
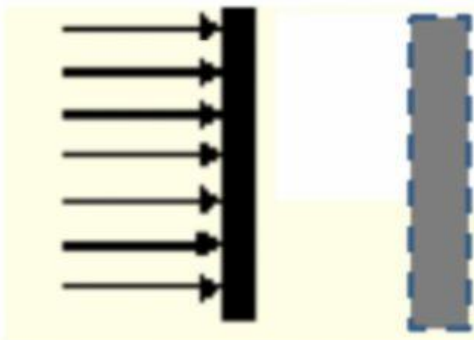


Materials and Light Live-worksheet

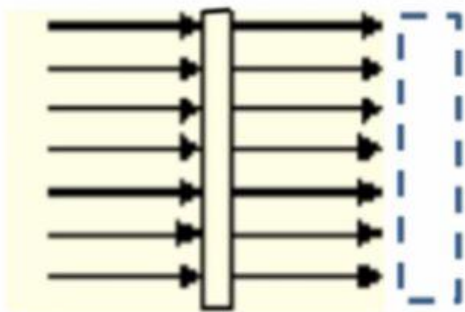
Light is shining on three objects below. Write which one it transparent, translucent, and opaque on the line next to each. Also, write what evidence led you to that conclusion.



1. _____
Evidence for my conclusion: _____



2. _____
Evidence for my conclusion: _____



3. _____
Evidence for my conclusion: _____