



Drag and Drop.

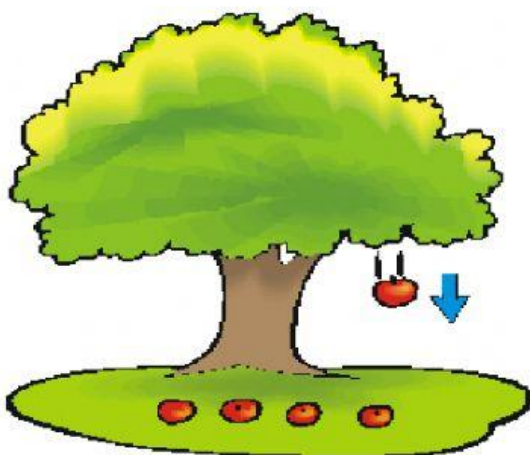
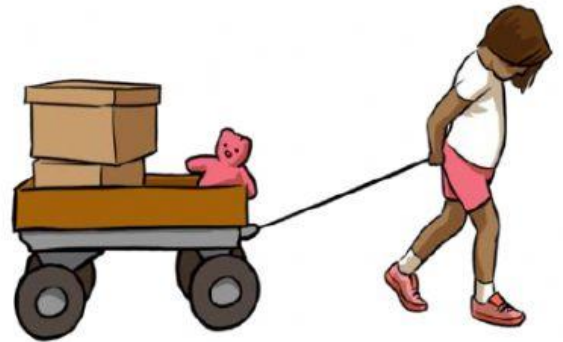
Select the word that tells about the force shown in each picture.


Pull

Push

Gravity

Friction






Complete the sentences below.

This boy uses a **big force** to push the ball _____.



You need _____
when you type on the
keyboard.





What will happen if this girl drags her rollerblades' rubber stopper on the ground?



What kind of force it is?

SELF-ASSESSMENT

How well did I understand
our Science topic today?


Type your level number:

Got it



3

I need help



2

I am confused



1