




Mathematics

Money Problem Solving

Banana	Apple	orange	Plum
			
\$12.60 ^c	\$10.00 ^c	\$6.05 ^c	\$20.50 ^c

1. What is the most expensive fruit?
2. How much does two oranges cost?
3. How much does an apple and a plum cost?
4. Which fruit is the cheapest?
5. Tim buys three apples, he gave the vendor \$50, how much change should he receive?
6. How much money do I need to buy all the fruits?