






Name: \_\_\_\_\_

## How Plant Parts Help Them Adapt

Place the pictures under the correct column to show how plant parts help them live where they do.

				
pointy tip	hairy leaves	spines	long roots and stems	close to each other

DESERT (hot)	TROPICAL RAINFORESTS (rainy)	TUNDRA (cold)

*Some of these plants can be found in The Bahamas where it is warm. Sometimes, it is rainy and sometimes it is sunny.*

Tell if each statement is true or false.

1. A **cactus** is not found in The Bahamas.

true

false

2. Pine trees can be found in The Bahamas.

☐ true☐ false

3. Mosses are found in The Bahamas.

☐ true☐ false