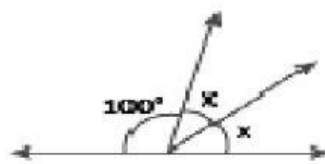


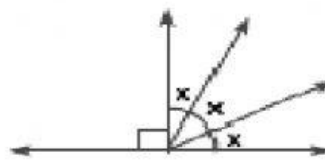
## **ÁNGULOS**

1) Halla el valor de «x» en cada caso.

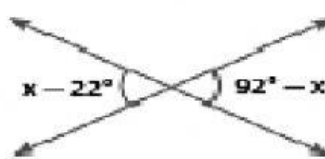
a)



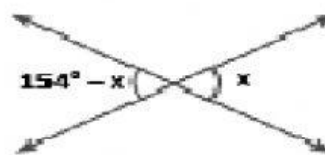

b)




c)

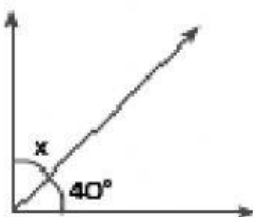



d)



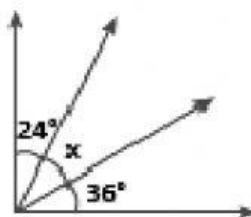

2) Escribe la medida del ángulo que falta para completar el ángulo recto o llano según sea el caso.

a)



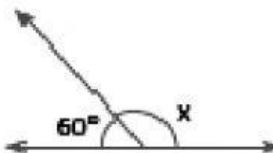
x = \_\_\_\_\_

c)



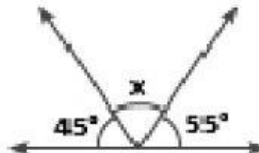
x = \_\_\_\_\_

b)



x = \_\_\_\_\_

d)



x = \_\_\_\_\_