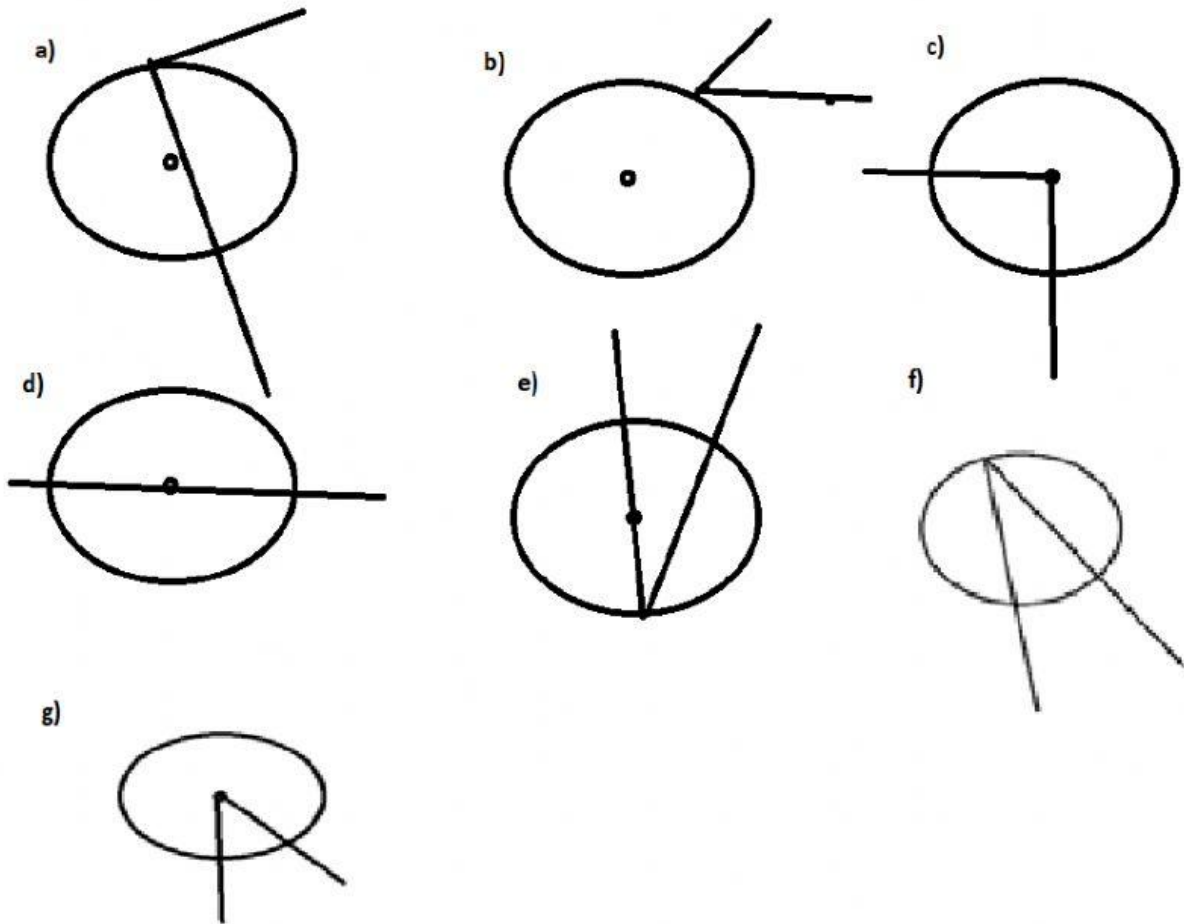


## SREDIŠNJI I OBODNI KUT

1. Odredi na kojoj slici su prikazani obodni, a na kojoj središnji kutovi:



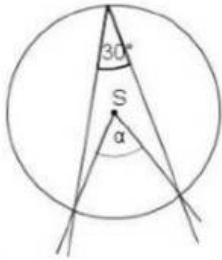
**Uputa: U sljedećim zadacima odgovaraj samo brojkama, s oznakama mjerne jedinice npr.  $23^\circ$**

2. Koliki je središnji kut ako njemu pridruženi obodni kut ima :  
 $72^\circ$  \_\_\_\_\_

3. Koliki je obodni kut ako njemu pridruženi središnji kut ima  
a)  $64^\circ$  \_\_\_\_\_

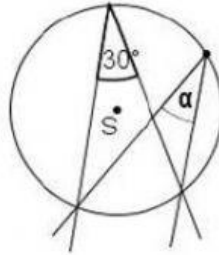
4. Bez mjerenja odredi veličine nepoznatih kutova na slici.

a)

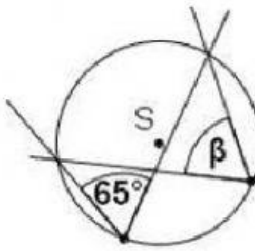


$$\alpha = \underline{\hspace{2cm}}$$

b)

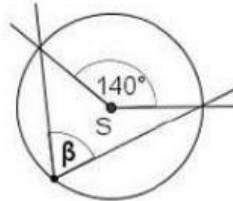


$$\alpha = \underline{\hspace{2cm}}$$



$$\beta = \underline{\hspace{2cm}}$$

d)



$$\beta = \underline{\hspace{2cm}}$$