

Name _____

Date _____

Averages

1. Laquan scored the following goals in 8 games.

3, 2, 3, 4, 1, 2, 3, 0

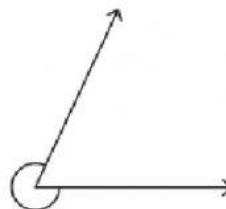
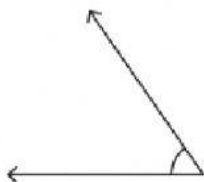
What is the modal number of goals?

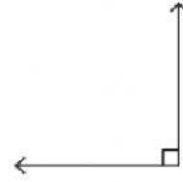
2. Calculate the mean of 16, 14 and 6.
3. Praise-Faith's total in 7 tests is 511. Find her mean mark scored.
4. The mean of 3 numbers is 9. What is the sum of the three numbers?
5. The mean of **two** numbers is **15**. If one of the numbers is 18, what is the other number?
6. The **mean** of **two** numbers is **24**. If one of the numbers is 18, what is the other number?
7. The mean of three numbers is 42. If two of the numbers are 37 and 49, what is the other number?
8. The mean of three numbers is 32. If two of the numbers are 24 and 38, what is the other number?
9. The mean of three numbers is 56. If two of the numbers are 45 and 60, what is the other number?
10. The mean of four numbers is 50. If three of the numbers are 60, 84 and 16, what is the other number?

Angles

Name the angles using the words from the box below.

right	reflex	obtuse	acute	straight
-------	--------	--------	-------	----------





Calculate the missing angles.

