

Ability Test

Name _____

Read each question carefully circle the best response.

1. Which number is next in the series? 1,4,9,16,25,_____
- a. 30 b. 31 c. 35 d.36

2. Which word does **NOT** belong with the others?

a. Veterinarian b. dentist c. pediatrician d. dermatologist

For questions 3 and 4, find the word that names a necessary part of the underlined word.

3. Tablet

a. charger b. screen c. keyboard d. wifi

4. School

a. desk b. chair c. students d. kitchen

5. A quarter of a number is 60, what is the number?

a. 15 b. 30 c. 120 d. 240

6. Choose the most suitable word to replace the words in bold.

Mrs. Brown bought some beef from the **man that sells meat** yesterday.

a. Vendor b. retailer c. butcher d. merchant

7. What comes in place of the question mark? **Bulls: Bellow: Monkey:?**

a. roar b. bray c. mew d. chatter

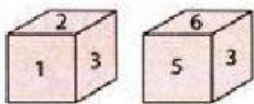
8. Cattle is to herd as fish is to:

a. hive b. school c. sea d. pond

9. If 'Endless' is related to 'Eternal' then 'Strong' is related to which of the following?

a. huge b. fat c. stout d. weak

10. Two positions of a dice are shown below. Which digit will appear on the face opposite to the face with number 4?



A) 3 B) 5 C) 6 D) 2

11. How many small cubes make up the solid below?



a. 10 b. 15 c. 18 d.21

12. Rahul started walking straight towards East. He walks a certain distance and then turns his right and walks again. Find the direction he is walking now.

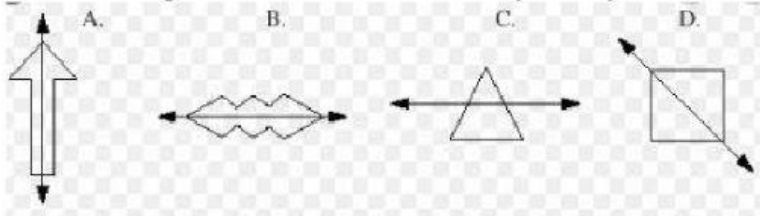
a. north b. south c. east d. west

13. **Read** is coded **7683**
Maid is coded **9823**
Rose is coded **7106**

What is the meaning of 7823670?

- a. riders b. readers c. readier d. raiders

14. Which figure does not show a line of symmetry?



15. In six years, the age of my sister and her four children will be 120. What is the sum of their age now?

- a. 114 b. 100 c. 96 d. 90

16. A quarter of the students in a class are boys. How many girls are in the class if there is a total of 12 boys?

- a. 48 b. 36 c. 24 d. 18

17. Select the best word to complete.

We walked in the forest with our _____ feet to get a feel of nature.

- a. bare c. beer bear bier

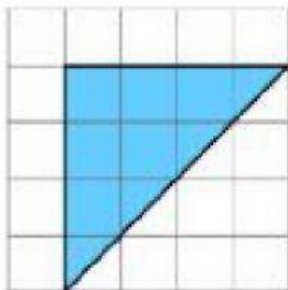
18. How many halves are there in 60?

- a. 20 c. 30 c. 90 d. 120

19. When 5 is multiplied by a number the result is 60, what is the number?

- a. 10 b. 11 c. 12 d. 15

20. What is the area of the figure below if one square is 1cm x 1cm?



a. 6 cm^2

b. 8 cm^2

d. 10 cm^2

d. 12 cm^2

