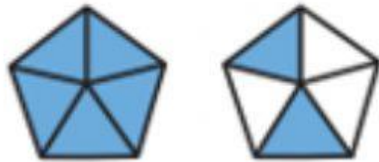


Write a mixed number for each shaded model.

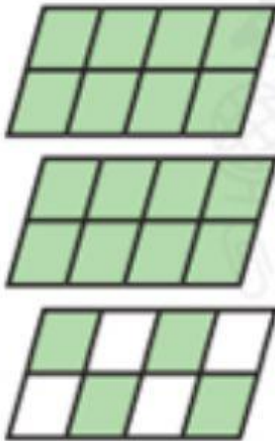
2.



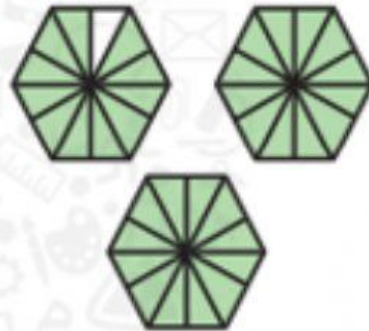
3.



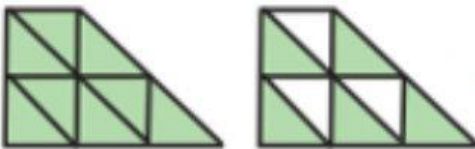
4.




5.



6.



7.



**Algebra** Write an equation that represents each mixed number as a sum of whole numbers and unit fractions.

8.  $3\frac{1}{4} =$  \_\_\_\_\_  $+$  \_\_\_\_\_  $+$  \_\_\_\_\_  $+$  \_\_\_\_\_