








1. Escribe el nombre de cada figura y de cada silencio

|                                                                                   |                                                                                   |                                                                                   |                                                                                     |                                                                                     |
|-----------------------------------------------------------------------------------|-----------------------------------------------------------------------------------|-----------------------------------------------------------------------------------|-------------------------------------------------------------------------------------|-------------------------------------------------------------------------------------|
|  |  |  |  |  |
| redonda                                                                           | .....                                                                             | .....                                                                             | .....                                                                               | .....                                                                               |

2. Une cada esquema rítmico con su compás correspondiente.



3. Indica a que familia corresponde cada instrumento:

**GUITARRA**

**PANDERO**

**FLAUTA**