

Fill in the missing words to state whether each shape is next to, inside, underneath or above the other.




Example 1



The small circle is inside the big circle.

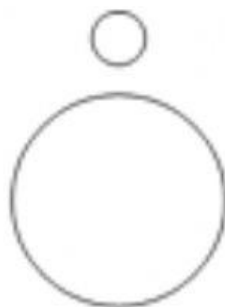
Example 2



The small square is above the big square.



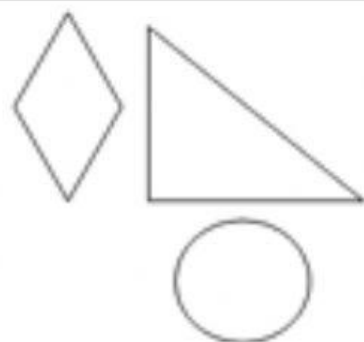
The small square is _____ the big square.



The small circle is _____ the big circle.



The circle is _____ the triangle



The diamond is _____ the triangle which is _____ the circle.



The triangle is _____ the circle and _____ the square.



The square is _____ the diamond, _____ the circle and _____ the triangle.