


Name :

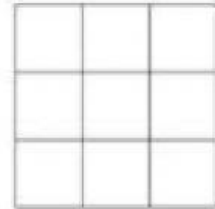
Find the area of the following figures:

1)




Area = _____ square cm

2)

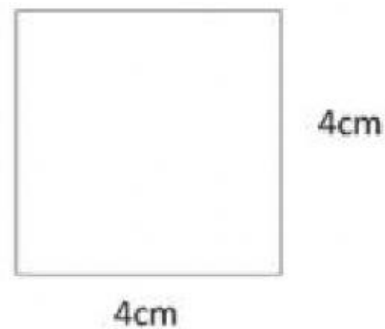


Area = _____ square cm

Find the area of this rectangle and square:



Area = _____ square cm



Area = _____ square cm

Tara wants a new carpet for her rectangular dining room. Her dining room is a rectangle of 5 meters by 7 meters. What will be the area of her carpet that covers her entire dining room?