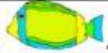
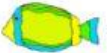










Name \_\_\_\_\_

Date \_\_\_\_\_



## ADDITION &amp; SUBTRACTION PROBLEMS TO 15 SHEET 1

		WORKING OUT
1)	I have 8  . I buy 4  more. How many do I have now? _____	
2)	There are 13  . 3  fly away. How many are left? _____	
3)	Newton has 14  . Sally has 11  . What is the difference? _____	
4)	There are 10  in a parking lot. 5 more  come along. How many are there in total? _____	
5)	Frazer has 6  . Flame has 7  .  What is the sum? _____	