



Date: Today is _____, January _____, 2021.

Name: _____ Grade: 3th _____


WEEK #12: NUMBERS

A. Read and complete the pattern with the correct number.

1. three, four, five, _____, seven.
2. eleven, twelve, thirteen, _____, fifteen.
3. eight, nine, ten, _____, twelve.
4. five, ten, fifteen, _____.
5. two, four, six, _____.

6. four, _____, twelve, sixteen.

B. Look at the picture and count. Then, read and select.



- | | | | |
|---------------------------------|----|----|----|
| 1. How many students are there? | 11 | 5 | 16 |
| 2. How many shoes are there? | 14 | 11 | 22 |









3. How many books are there?

28

22

8

C. Look at the pictures. Then, write the correct numbers in letters.

<u> six </u> pencils		_____	
_____ notebooks		_____	
_____ erasers		_____	
_____ crayons		_____	

D. Look at C. Then, count and write.

1. How many pencils are there?

$$6 + 7 = 13$$

There are **thirteen** pencils

2. How many notebooks are there?

$$5 + 10 =$$

There are _____ notebooks.

3. _____ erasers are _____?

$$3 + \underline{\quad} = \underline{\quad}$$

_____.

4. _____ crayons _____?

$$\underline{\quad} + \underline{\quad} = \underline{\quad}$$

_____.

D. Read and select Yes or No.



1. There are eight crayons.

Yes

No



2. There are fifteen books.

Yes

No



3. There are ten pencils.

Yes

No