

Name: \_\_\_\_\_

Date: \_\_\_\_\_

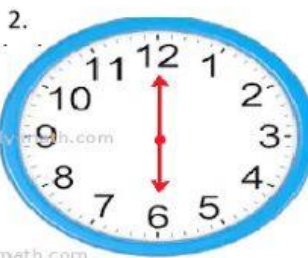
**"Angles: Types of angles"**

Direction: Write the time off each clock and identify the type of angles that shown by the hands of the clock.



TIME: \_\_\_\_\_

TYPES OF ANGLE: \_\_\_\_\_



TIME: \_\_\_\_\_

TYPES OF ANGLE: \_\_\_\_\_



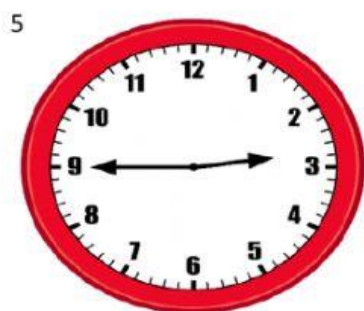
TIME: \_\_\_\_\_

TYPES OF ANGLE: \_\_\_\_\_



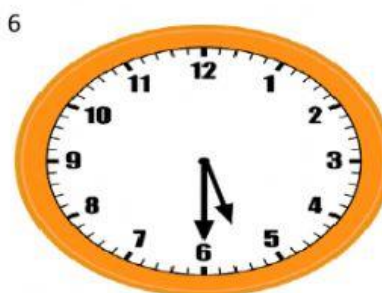
TIME: \_\_\_\_\_

TYPES OF ANGLE: \_\_\_\_\_



TIME: \_\_\_\_\_

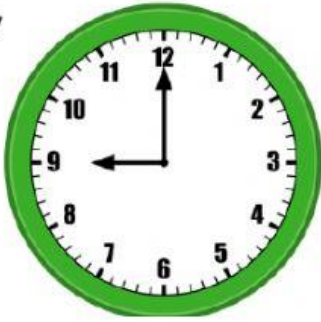
TYPES OF ANGLE: \_\_\_\_\_



TIME: \_\_\_\_\_

TYPES OF ANGLE: \_\_\_\_\_

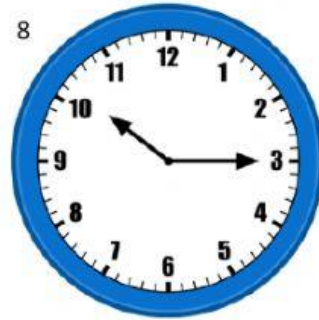
7



TIME: \_\_\_\_\_

TYPES OF ANGLE: \_\_\_\_\_

8



TIME: \_\_\_\_\_

TYPES OF ANGLE: \_\_\_\_\_