



Match the time. Write the correct number into the boxes.

1. It's three o'clock.	12.35
2. It's a quarter past eight.	8.05
3. It's half past ten.	11.25
4. It's five to five.	1.58
5. It's twenty five past nine.	8.15
6. It's twenty-five to eleven.	4.55
7. It's two to two.	10.35
8. It's twenty-five past eleven.	9.25
9. It's five past eight.	10.30
10. It's thirty-five past twelve.	1. 3.00

Ex. 2. What time is it? Write in numbers.


1. It's seven thirty - 7:30
2. It's ten past eleven- 11:10
3. It's five to ten -
4. It's a quarter to three-
5. It's one to one -
6. It's four thirty-five -
7. It's a quarter past three -
8. It's twelve o'clock -
9. It's eight forty-five -
10. It's two fifty-five. -

It's your turn now!




What time is it? Write complete sentences next to each clock.

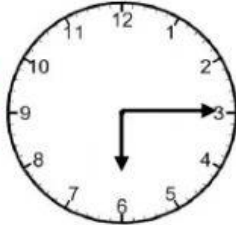
1




2



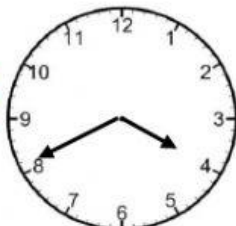
3




4



5



6



7