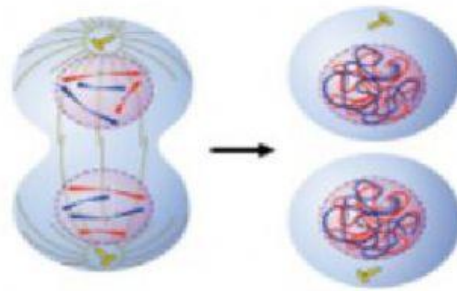


## Select the correct option

The process that is taking place in the picture is?

- A. G1
- B. G2
- C. Mitosis(M)
- D. Cytokinesis(C)



Mariam says that the given organism reproduces by binary fission. What do you understand by that?

- A. Because they are eukaryotic cells
- B. Because they are prokaryotic cells
- C. Because they are animal cells
- D. Because they are animal cells




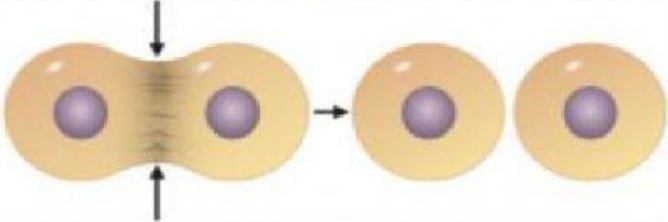
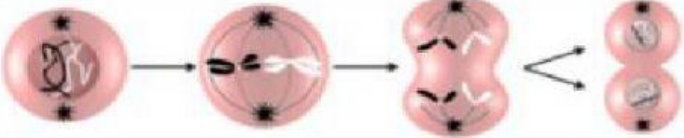
The longest phase of cell cycle is?

- A. Metaphase
- B. Interphase
- C. Mitosis
- D. Cytokinesis

. Select the stages of the cell cycle in order: G2, S, G1, M. ?

- A. G1, S, G2, M
- B. S, G1, G2, M
- C. M, G1, S, G2
- D. G1, M, G2, S

Match the following pictures with their stages.

	<div>Cytokinesis</div>
	<div>Interphase</div>
	<div>Mitosis</div>