

Mathematics

Concepts GCW



How many tens and ones?

A.



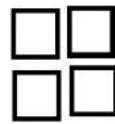
____ tens ____ ones = ____

B.




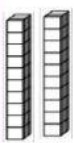
____ tens ____ ones = ____

C.





____ tens ____ ones = ____

D.



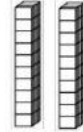
____ tens ____ ones = ____

E.



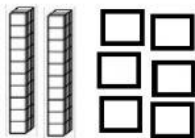
____ tens ____ ones = ____

F.



____ tens ____ ones = ____


G.



Tens	Ones

= ____

H.



Tens	Ones

= ____

Instructions: Fill in the missing numbers.

I. 36, ____, ____, 39

J. 31, ____, 33, ____, 35

K. 36, ____, 38, ____

L. 30, ____, 32, ____, ____, 35, ____, 37, ____, 39