

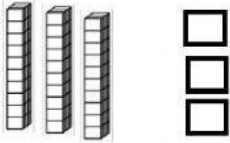
Mathematics

Tens and Ones Thirty Family Numbers



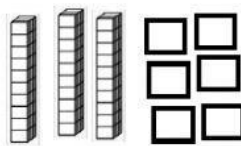
Instructions: Type how many tens and ones.

A.



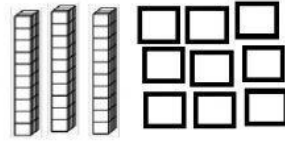
___ tens ___ ones = ___

B.



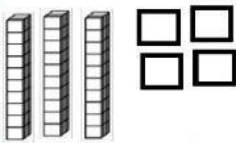
___ tens ___ ones = ___

C.



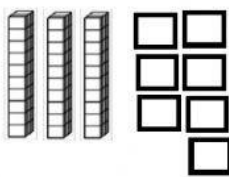
___ tens ___ ones = ___

D.



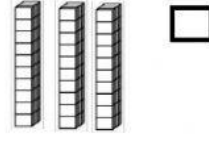
___ tens ___ ones = ___

E.




___ tens ___ ones = ___

F.



___ tens ___ ones = ___

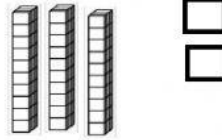
G.



Tens	Ones

= _____

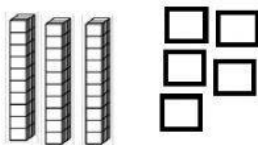
H.



Tens	Ones

= _____

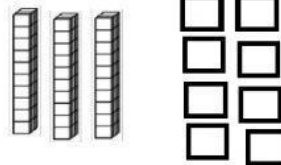
I.



Tens	Ones

= _____

J.



Tens	Ones

= _____