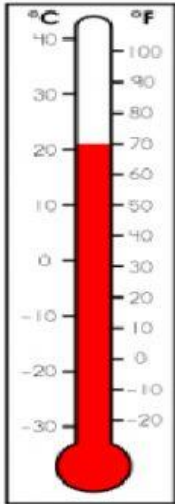


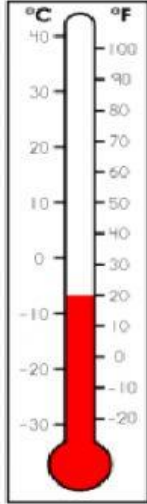
Name: _____

Math Quiz

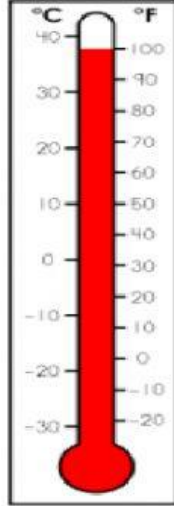
A. Look at each thermometer and record the temperature using the Fahrenheit scale.




1. _____°F



2. _____°F



3. _____°F



4. _____°F

B. Look at each clock and write the time to the hour.



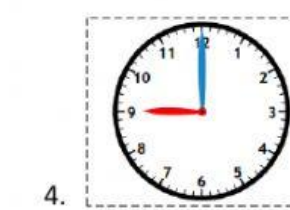
1. _____



2. _____



3. _____



4. _____