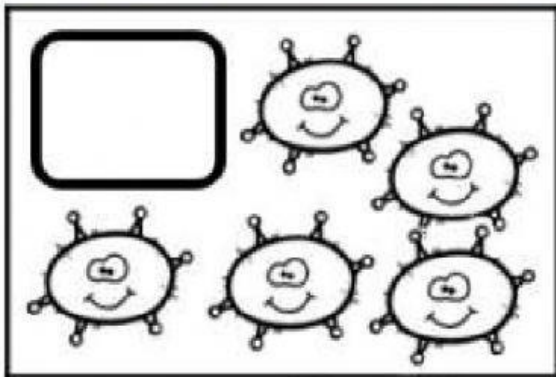


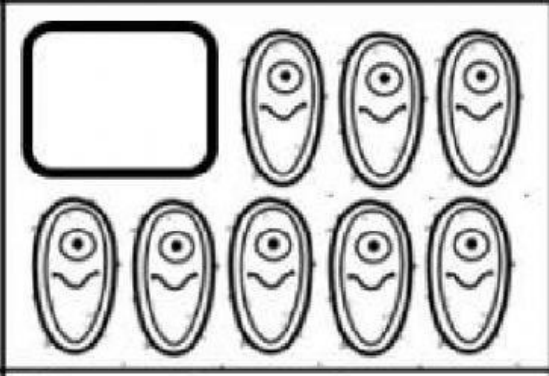

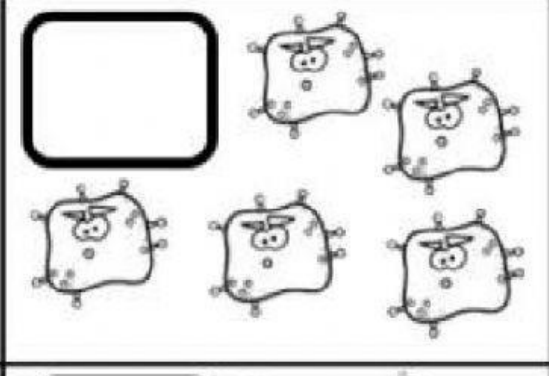

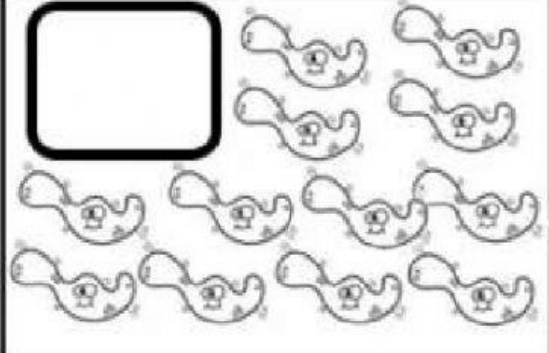
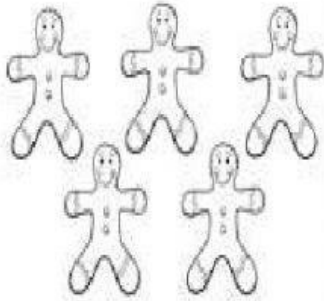


► Cuenta y escribe el número que corresponda.

1 2 3 4 5 6 7 8 9 10



1 8 7 6  
5 2 10  
4 9 3


HOW  
MANY?



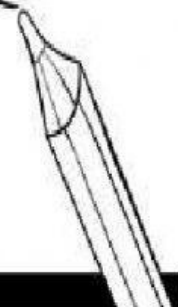
5 3 9 6  
10 4 2 8 1 7




9 2 7 4 5  
1 8 3 10 6




3 10 1 9  
7 8  
2 6 5 4



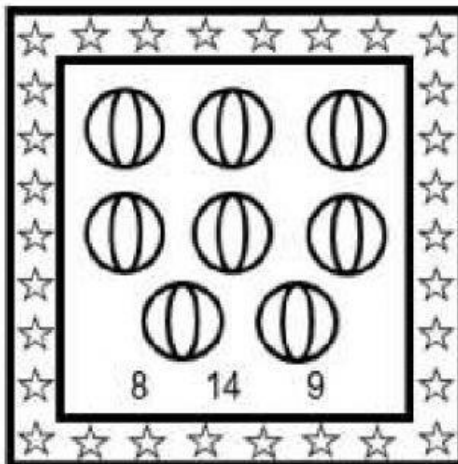
► Cuenta y encierra el número que corresponde.




A square box with a star border containing 12 cats arranged in two rows of six. Below the box are the numbers 10, 12, and 9.




A square box with a star border containing 15 horses arranged in three rows of five. Below the box are the numbers 15, 14, and 19.




A square box with a star border containing 8 balls arranged in three rows: two rows of three and one row of two. Below the box are the numbers 8, 14, and 9.



A square box with a star border containing 10 hearts scattered inside. Below the box are the numbers 7, 10, and 9.


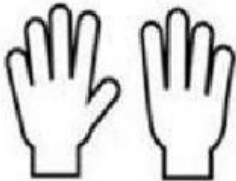


A square box with a star border containing 16 smiley faces arranged in four rows of four. Below the box are the numbers 15, 14, and 16.



A square box with a star border containing 14 lightning bolts arranged in four rows of four. Below the box are the numbers 14, 13, and 41.

Cuenta los dedos de cada mano y une con el número correcto



5

10

1

8

4

7

3

2

6

0

9

