
 Manahej	Science Department	Evaluation 1: Living and Non-living Things	Date:
	Name:		Duration: 30 min.
	Grade 2:		Score: /10

Exercise 1

A. Observe the pictures and then answer the following questions.

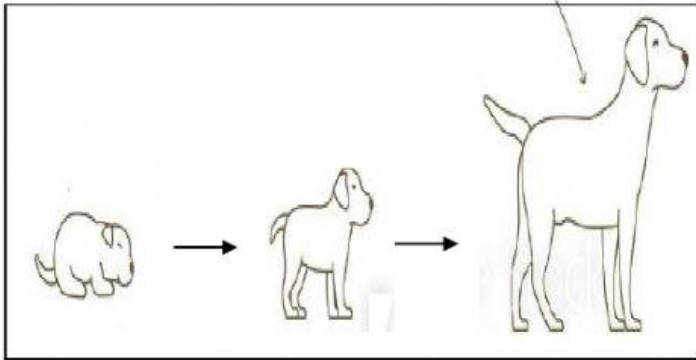


Document 1: Cat Eating


1. **Name** the animal in document 1.

2. **Indicate** what the animal is doing.


3. **Observe** the pictures and **match** to the appropriate words. (3 pt.)



-
- Feed




-
- Reproduce



-
- Grow

4. **Choose** the non-living thing. (1 pt.)




Exercise 2 (5 pt.)

1. **Mark** using a "T" if true and "F" if false. (3 pt.)



Document 2: Girl



Document 3: Pencil

	Girl		Pencil	
Can grow	<input type="checkbox"/>	<input type="checkbox"/>	<input type="checkbox"/>	<input type="checkbox"/>
Can reproduce	<input type="checkbox"/>	<input type="checkbox"/>	<input type="checkbox"/>	<input type="checkbox"/>
Can feed	<input type="checkbox"/>	<input type="checkbox"/>	<input type="checkbox"/>	<input type="checkbox"/>

2. **Fill** in the blank with the appropriate word. (2 pt.)

a. Humans are examples of _____ things.

b. A pencil is an example of _____ things.

