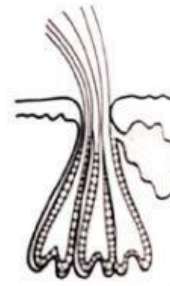


IDENTIFICA LAS SIGUIENTES DISPLASIAS PILOSAS CONGÉNITAS:

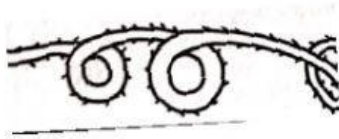
1.



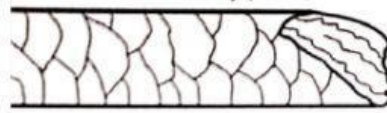
2.



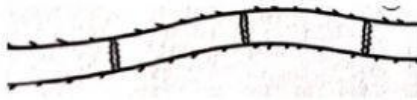
3.



4.



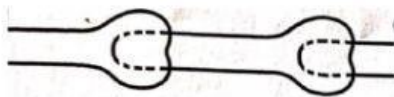
5.



6.




7.

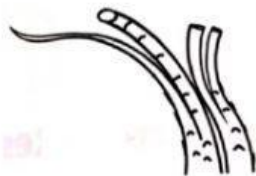


IDENTIFICA LAS SIGUIENTES DISPLASIAS PILOSAS ADQUIRIDAS:

A



B



C



D

