


COLEGIO FREINET DEPARTAMENTO DE MATEMÁTICAS		F.AC-GC 004 V04 01/08/2017	
ASIGNATURA MATEMÁTICAS	DOCENTE CATALINA GUZMÁN B. – KATHERINE CUBIDES	GRADO 2° E. B. P	

3-D Shapes

Escribe en cada sólido geométrico cuantas caras (faces), vértices (vértices) y aristas (edges) tiene teniendo en cuenta lo aprendido:

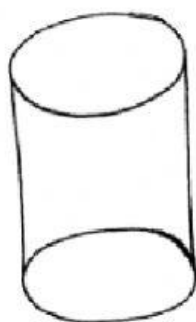


Cone

Faces: _____

Edges: _____

Vertices: _____

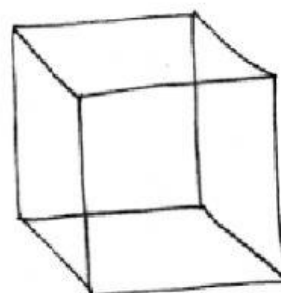


Cylinder

Faces: _____

Edges: _____

Vertices: _____

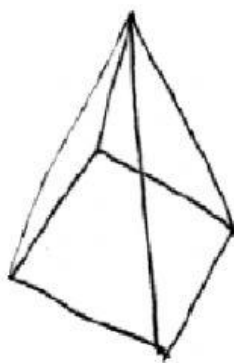


Cube

Faces: _____

Edges: _____

Vertices: _____

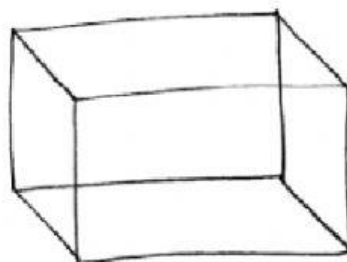


Pyramid

Faces: _____

Edges: _____

Vertices: _____

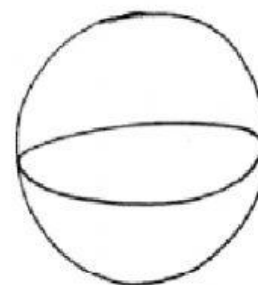


Rectangular Prism

Faces: _____

Edges: _____

Vertices: _____



Sphere

Faces: _____

Edges: _____

Vertices: _____