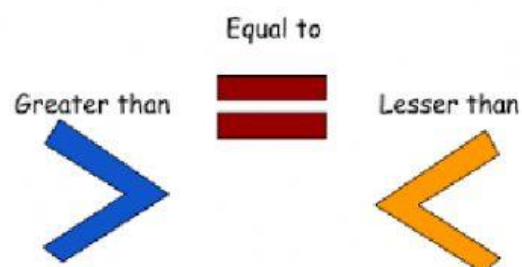
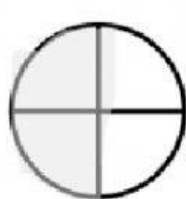


Compare the fractions
using $>$, $<$, or $=$.



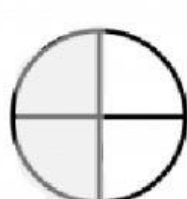
Hint: Think about which fraction
covers more space!



$$\frac{2}{4}$$



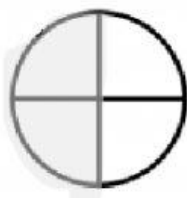
$$\frac{3}{4}$$



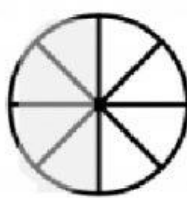
$$\frac{2}{4}$$



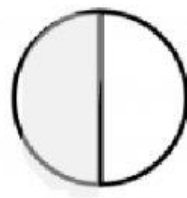
$$\frac{2}{3}$$



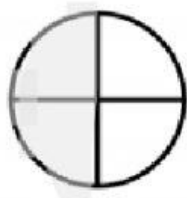
$$\frac{2}{4}$$



$$\frac{4}{8}$$



$$\frac{1}{2}$$



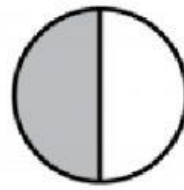
$$\frac{2}{4}$$



$$\frac{3}{4}$$



$$\frac{4}{5}$$



$$\frac{1}{2}$$



$$\frac{1}{3}$$

