


Entry Functional Skills Entry 1/2 – Shapes workbook

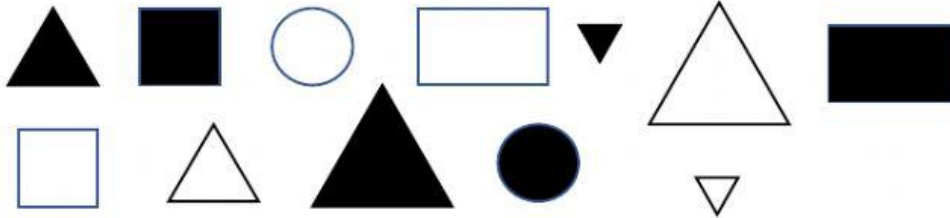
1. What shape is this?



2. What shape is this?



3. Tick the black triangles.



4. Is this a blue square?

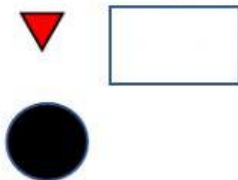


5. Is this a pink circle?



6. How many edges does a square have?

7. Where is the red triangle?



Tick the true answers

- ☐ The red triangle is below the circle
- ☐ The red triangle is above the circle
- ☐ The red triangle is next to the rectangle
- ☐ The red triangle is inside the rectangle

8. What is the shape on the base of this cuboid?

