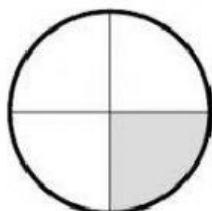


LO: Recognise and understand simple fractions

Please click on the live link and type the answers.

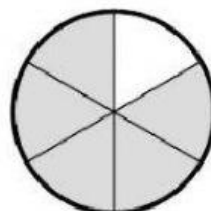
What fraction of each shape is grey?

(1)



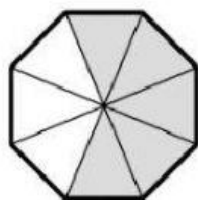
$$= \frac{1}{4}$$

(6)




$$= \frac{\quad}{\quad}$$

(2)



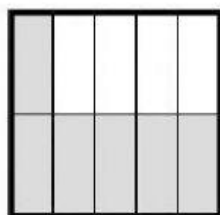
$$= \frac{\quad}{\quad}$$

(7)



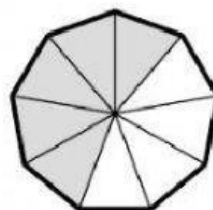
$$= \frac{\quad}{\quad}$$

(3)




$$= \frac{\quad}{\quad}$$

(8)




$$= \frac{\quad}{\quad}$$

(4)



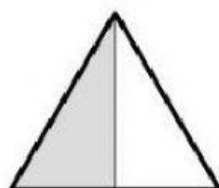
$$= \frac{\quad}{\quad}$$

(9)




$$= \frac{\quad}{\quad}$$

(5)



$$= \frac{\quad}{\quad}$$

(10)



$$= \frac{\quad}{\quad}$$

(11) What fraction of the puzzle pieces are **green**?



(12) What fraction of the animals are **cats**?



(13) What fraction of the animals are **zebras**?



(14) What fraction of the flowers are **yellow**?



(15) What fraction of the flowers are **pink**?



(16) What fraction of shirts is **not black**?

