





## Addition Word Problems

### Sums to 10

**Instructions:** Read each word problem. Count the pictures to find the sum.



- A. Dug saw 3 red balls in the bush. 
- His pal saw 3 black balls in the bush. 
- How many balls did they see altogether?

$$3 + 3 = \boxed{\phantom{00}} \text{ balls}$$



- B. Shan had 6 candies. 
- Sham had 4 candies. 

How many candies do they have in all?

$$6 + 4 = \boxed{\phantom{00}} \text{ candies}$$

- C. Tom has 5 pens. 
- His dad gave him 2 more pens. 
- How many pens does Tom have in all?

$$5 + 2 = \boxed{\phantom{00}} \text{ pens}$$

- D. There are 2 birds in the tree. 
- 6 more birds flew in the tree. 
- How many birds are in the tree altogether?

$$2 + 6 = \boxed{\phantom{00}} \text{ birds}$$