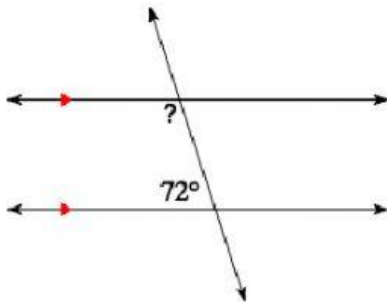


Find the Measure of Angles - Parallel Lines

Find the measure of each angle indicated (?)

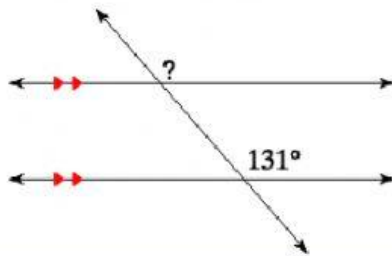
1)



Angle Relationship: _____

Find ?:

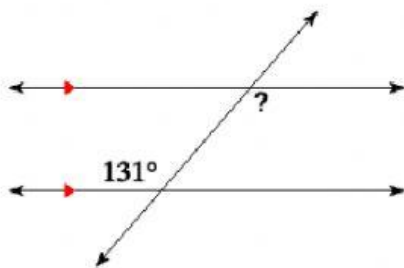
2)



Angle Relationship: _____

Find ?:

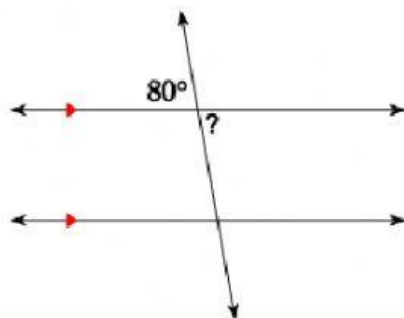
3)



Angle Relationship: _____

Find ?:

4)



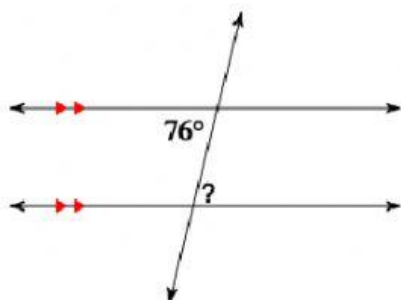
Angle Relationship: _____

Find ?:

Find the Measure of Angles - Parallel Lines

Find the measure of each angle indicated (?)

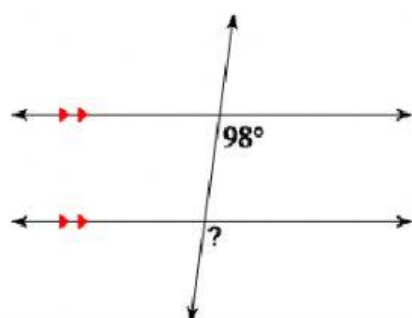
5)



Angle Relationship: _____

Find ?:

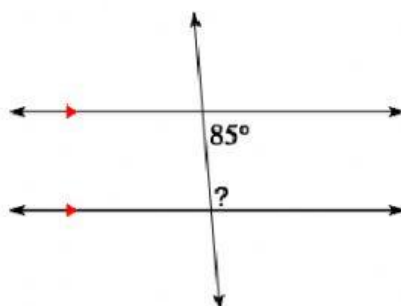
6)



Angle Relationship: _____

Find ?:

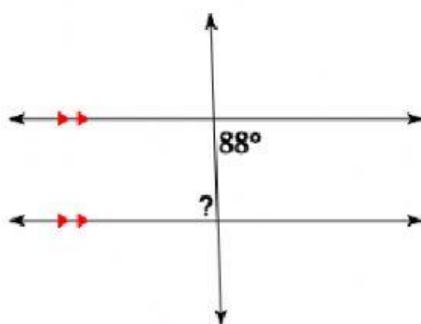
7)



Angle Relationship: _____

Find ?:

8)



Angle Relationship: _____

Find ?: