








How much money do I have?

<p>I have a toonie, a loonie, a quarter and a nickel.</p> <p>\$3.30</p>	<p>I have a quarter and a dime.</p>  <p>\$0.35</p>	<p>I have one five-dollar bill, four dimes and two nickels.</p> <p>\$</p>
<p>I have a ten-dollar bill, three dimes and two quarters.</p> <p>\$</p>	<p>I have a toonie, a loonie and two dimes.</p> <p>\$</p>	<p>I have 3 quarters and 3 nickels.</p>  <p>\$</p>
<p>I have a 20-dollar bill and three quarters.</p> <p>\$</p>	<p>I have four dimes and a nickel.</p>  <p>\$</p>	<p>I have a quarter, a dime, a nickel and a loonie.</p> <p>\$</p>
<p>I have 2 dimes and 2 5-dollar bills.</p>  <p>\$</p>	<p>I have two toonies and three loonies.</p>  <p>\$</p>	<p>I have four nickels and a dime.</p> <p>\$</p>