

Sandilands Primary School  
CHRISTMAS TERM EXAMINATION 2020  
GRADE FOUR

SOCIAL STUDIES

1. The Earth is divided into two halves called \_\_\_\_\_

- a. continents
- b. poles
- c. hemispheres
- d. countries

2. A \_\_\_\_\_ is a tool used to tell direction.

- a. point
- b. compass
- c. ruler
- d. map

3. The flamingoes and salt are natural resources on the island.

- a. Acklins
- b. Inagua
- c. Exuma
- d. Andros

4. Match the following term to its definition.

archipelago

a rounded cliff

flat

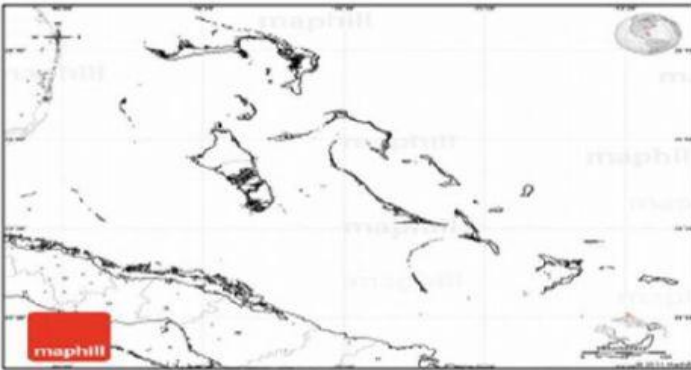
a group of islands and cays surrounded by water.

bluff

an area of muddy water usually around mangroves.

### 1. Islands of The Bahamas

Look carefully at the picture below, then answer question A.



A. Where is The Bahamas Located?

---

---



---

B. The islands of The Bahamas are divided into 3 groups. Complete the table below stating the group each island is located in. [3]

Island	Grouping
New Providence	
Rum Cay	
Mayaguana	

C. The Bahamas covers a large area. There may be different kinds of weather occurring in different parts of the country at the same time.

Explain what each weather instrument below is used to measure.

Instrument	What it does
1. 	
2. 	
3. 