

## Missing Side Lengths

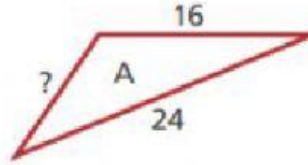
For each shape, find the missing side length. Don't forget the unit of measure.

1. Triangle A

Perimeter: 51 inches

Known side lengths (in.): 16, 24

Missing side length: \_\_\_\_\_

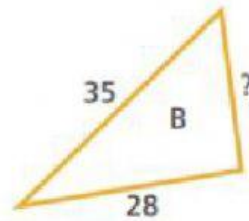


2. Triangle B

Perimeter: 83

Known side lengths (cm): 35, 28

Missing side length: \_\_\_\_\_

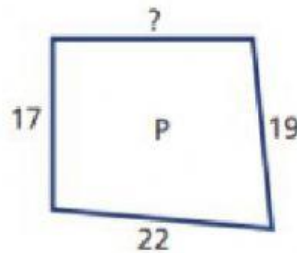


3. Quadrilateral P

Perimeter: 78

Known side lengths (ft): 17, 19, 22

Missing side length: \_\_\_\_\_



4. Quadrilateral D

Perimeter: 110

Known side lengths (m): 24, 21, 38

Missing side length: \_\_\_\_\_

