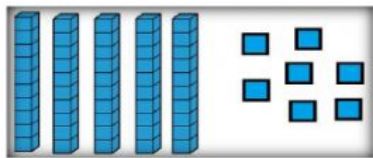
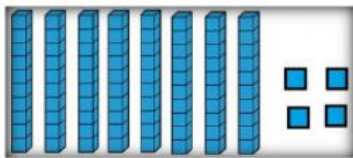


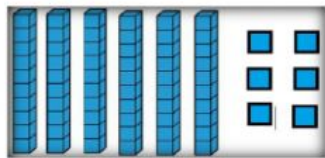
Direction: Write the correct value of each base 10 blocks. Write your answers in Maths Notebook.



\_\_\_\_\_



\_\_\_\_\_



\_\_\_\_\_

Direction: How many tens and ones?

Number	Tens	Ones
21		
36		
48		
48		

Challenge: Draw the base 10 for 79