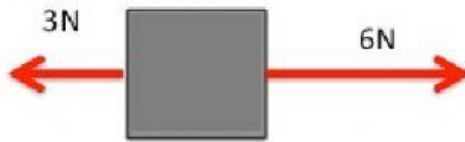


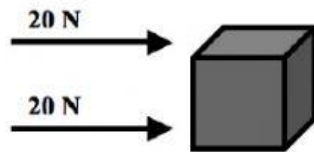
Net of Forces_G7

Instruction : Calculate the net of forces act to an object and the direction of net forces.

1. Look at the figure.



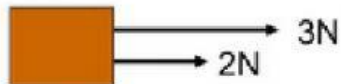
2. Look at the figure.



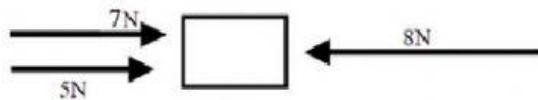
3. Look at the figure.



4. Look at the figure.

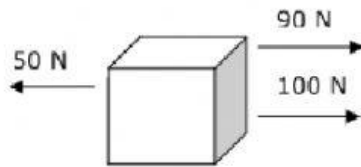


5. Look at the figure.

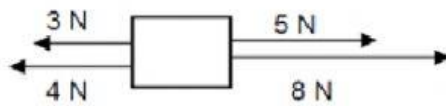


Net of Forces_G7

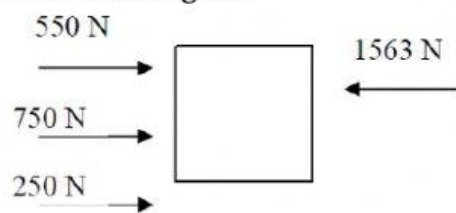
6. Look at the figure.



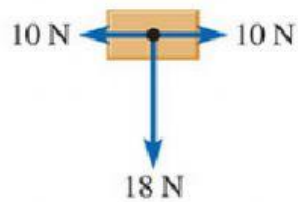
7. Look at the figure.



8. Look at the figure.



9. Look at the figure.



10. Look at the figure.

