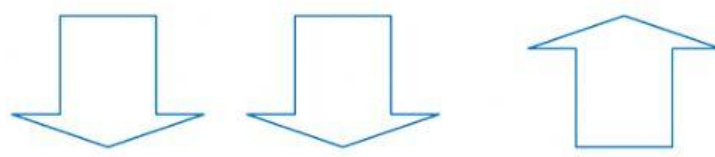


פתרו את התרגילים הבאים:

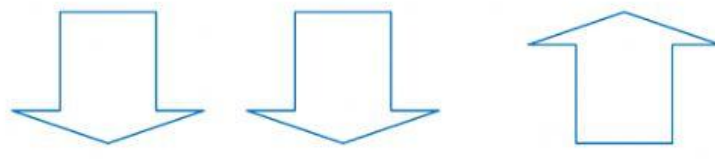
היעזרו בחיצים כדי להגדיל את המחולק והמחלק וכדי להקטין את המנה.

$$0.54 : 9 = \boxed{}$$



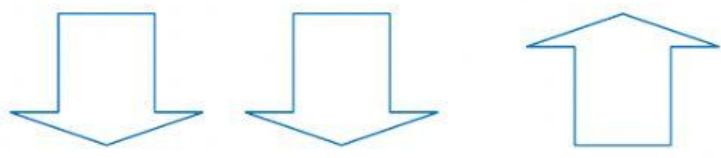
$$\boxed{} : \boxed{} = \boxed{}$$

$$0.64 : 8 = \boxed{}$$



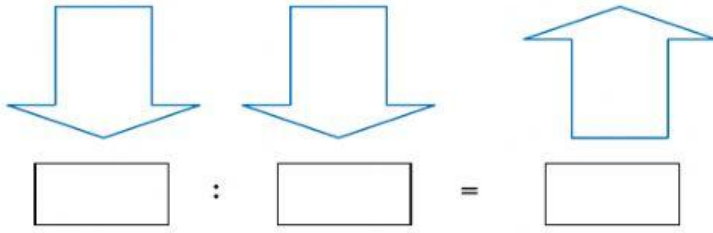
$$\boxed{} : \boxed{} = \boxed{}$$

$$4.2 : 7 = \boxed{}$$

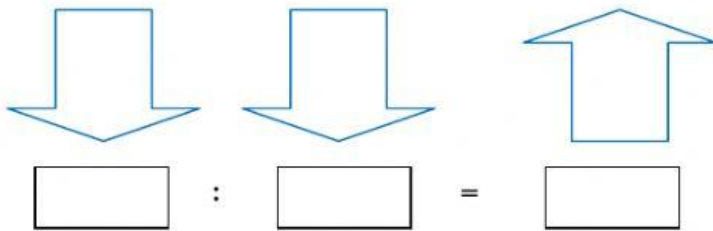


$$\boxed{} : \boxed{} = \boxed{}$$

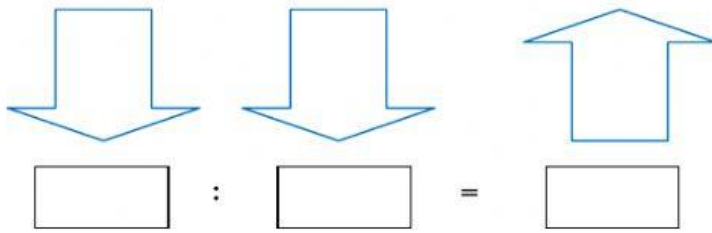
$$56 : 0.7 = \boxed{}$$



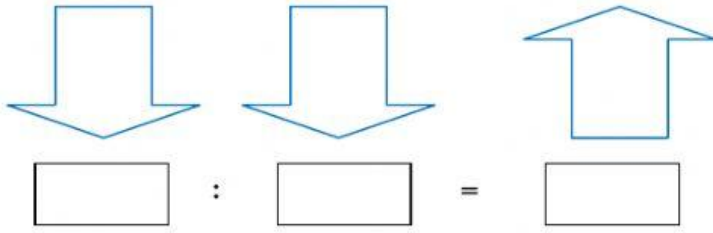
$$32 : 0.4 = \boxed{}$$



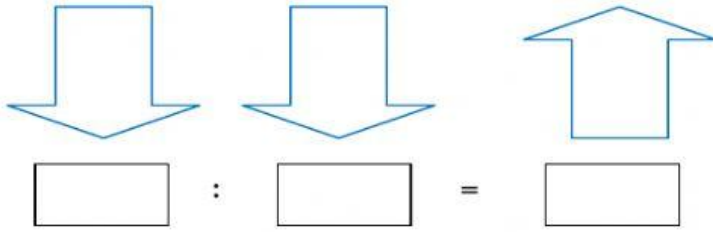
$$18 : 0.03 = \boxed{}$$



$$0.28 : 0.04 = \boxed{}$$



$$0.09 : 0.03 = \boxed{}$$



$$3.5 : 0.5 = \boxed{}$$

