










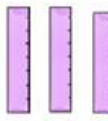



Choose the correct option

<p>1.</p> <p>How many pencils are there?</p> <p>..... pencil.</p>  <p>a) One b) Two c) Five</p>	<p>7.</p> <p>How many pencil cases are there?</p> <p>..... pencil cases</p>   <p>a) One b) Seven c) Four</p>
<p>2.</p> <p>How many crayons are there?</p> <p>..... crayons</p>   <p>a) Five b) Three c) Six</p>	<p>8.</p> <p>How many books are there?</p> <p>..... book</p>  <p>a) Seven b) One c) Four</p>
<p>3.</p> <p>How many pencil cases are there?</p> <p>..... pencil cases</p>     <p>a) Six b) Three c) Seven</p>	<p>9.</p> <p>How many rulers are there?</p> <p>..... rulers</p>    <p>a) Six b) Eight c) Seven</p>

4.

How many pens are there?



..... pens

- a) Six
- b) Three
- c) Eight

10.

How many notebooks are there?



..... notebooks

- a) Four
- b) Two
- c) Eight

5.

How many books are there?



..... books

- a) Four
- b) Three
- c) Eight

11.

How many pencil sharpeners are there?



..... sharpeners

- a) Ten
- b) Three
- c) Five

6.

How many pens are there?

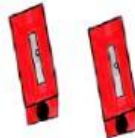


..... pen

- a) Two
- b) One
- c) Four

12.

How many pencil sharpeners are there?



..... pencil sharpeners

- a) Nine
- b) Two
- c) Five