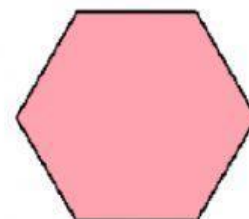
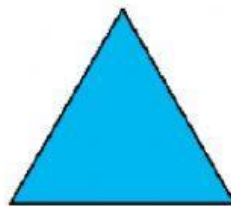

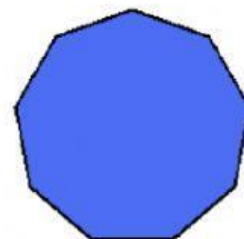
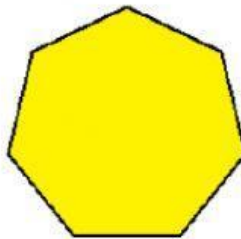

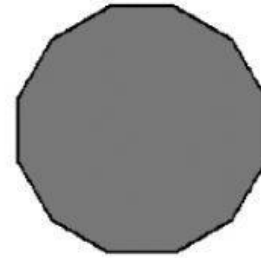

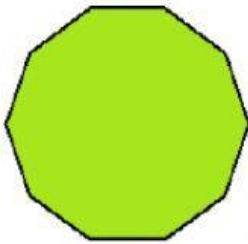


## I POLIGONI REGOLARI

Scrivi sotto ogni poligono il nome della figura:

TRIANGOLO EQUILATERO   QUADRATO   PENTAGONO   ESAGONO  
ETTAGONO   OTTAGONO   ENNAGONO   DECAGONO   DODECAGONO



I poligoni regolari sono poligoni che hanno tutti i  
..... e gli ..... congruenti.

