
















Click the correct answer based on the information from the pictograph below.

The pictograph below shows the number of flowers belonging to Wafa.

Number of Wafa's flowers

<b>Blue</b>	    
<b>Red</b>	  
<b>Green</b>	   
<b>Purple</b>	  

**Key:**

 Represent 1 flower

- (a) Wafa has ( 4, 5, 6 ) blue flowers.
- (b) The number of ( red, green, purple ) flowers is 4.
- (c) The number of red flowers is ( more, same, less ) than the purple flowers.
- (d) The difference of the blue flowers and red flowers is ( 6, 4, 2 )
- (e) The number of green flowers is ( more, same, less ) than the blue flowers.
- (f) The total of all the flowers belonging to Wafa is ( 13, 15, 17 ).