

1st Semester Math Quiz

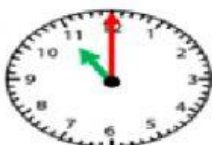
Solve each word problem by using addition, subtraction, or multiplication.

1. Jade has 84 dolls. She sold 32 of them. How many dolls are left? _____
2. Nathan had 11 fish in the fish tank. His mom gave him 15 from the store. How many fish does he have in all? _____
3. Craig invited 4 friends to his party. He gave each friend 3 slices of pizza. How many slices in all did he give to his friends? _____
4. Ted has 12 trucks. Jay has 25 trucks. How many more does Jay have than Ted? _____


Compare the numbers by putting $>$, $<$, or $=$ on the line.

5. 512 _____ 612 6. 1200 _____ 1200 7. 713 _____ 532 8. 10, 355 _____ 21, 345

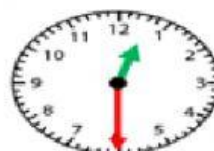
Write the time beneath each clock. Remember to use a colon (:) between the hour and minute.



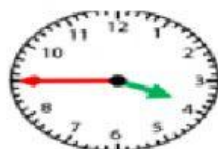
8. _____



9. _____



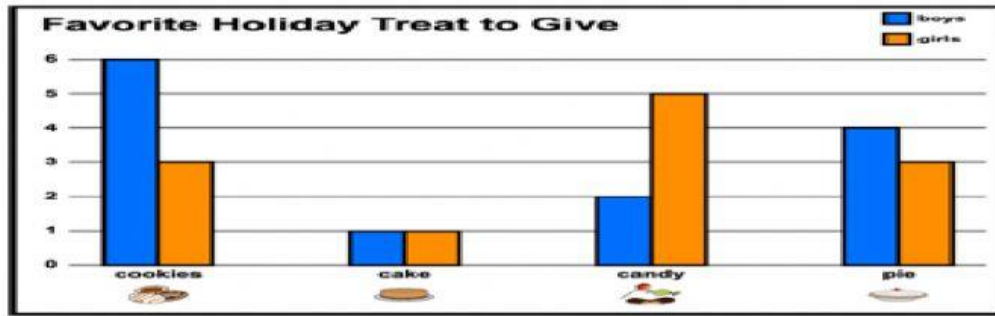
10. _____



11. _____

Write the missing numbers.

12. 25, _____, 35, 40, 45, 50, _____, 60, 65, 70, _____, _____, 85, 90, 95, 100
13. 15, 25, _____, 45, 55, _____, 75, _____, 95, 100



Use the above chart to answer each question.

14. How many more boys voted for pie than girls? _____

15. What is the total number of students who voted for candy? _____

16. Which holiday dessert got the least votes? _____

17. Which holiday dessert got the most votes? _____