

Last Name: \_\_\_\_\_

First Name: \_\_\_\_\_

Period: \_\_\_\_\_

Date: \_\_\_\_\_

## Order Pair Coordinates – First Quadrant

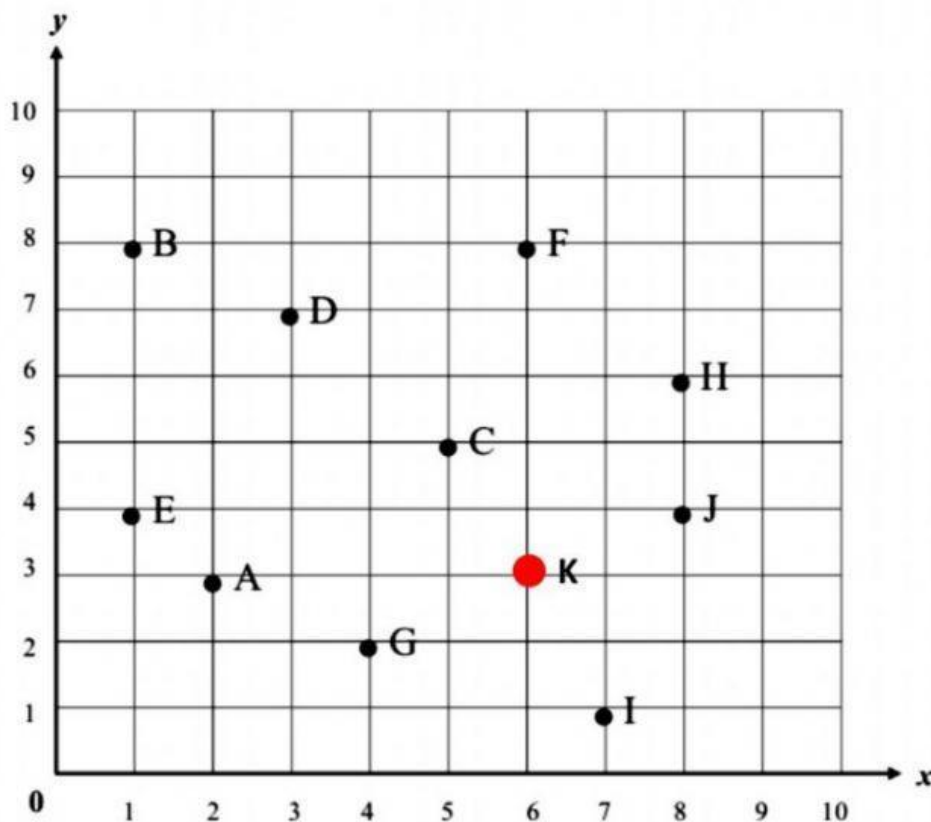
### Questions 1

**Instructions:** Write the x-coordinate and y-coordinate for each letter

X-coordinate : First

Y coordinate: Second

Write the coordinates for the following points:



Example: K ( 6 , 3)

POINT	COORDINATE
A	( <input type="text"/> , <input type="text"/> )
B	( <input type="text"/> , <input type="text"/> )
C	( <input type="text"/> , <input type="text"/> )
D	( <input type="text"/> , <input type="text"/> )
E	( <input type="text"/> , <input type="text"/> )

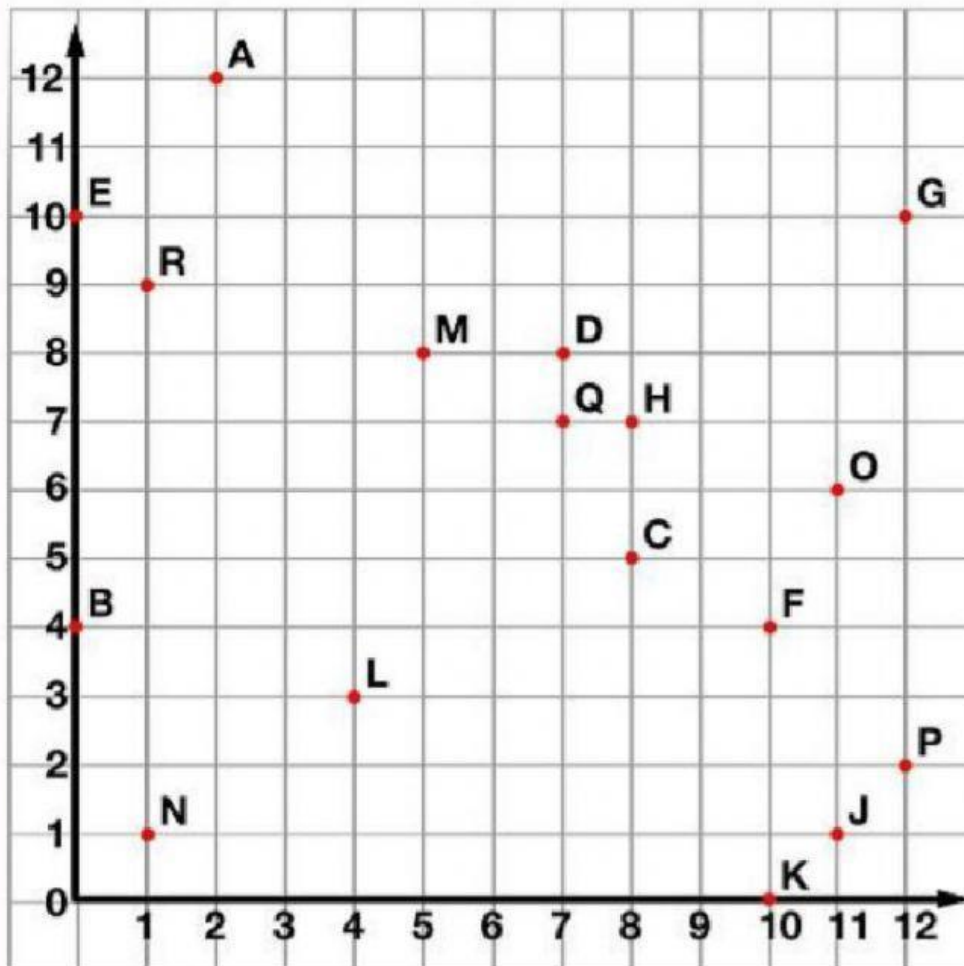
POINT	COORDINATE
F	( <input type="text"/> , <input type="text"/> )
G	( <input type="text"/> , <input type="text"/> )
H	( <input type="text"/> , <input type="text"/> )
I	( <input type="text"/> , <input type="text"/> )
J	( <input type="text"/> , <input type="text"/> )

## Questions 2

**Instructions:** Write the x-coordinate and y-coordinate for each letter/point

**X-coordinate :** First

**Y coordinate:** Second



Tell what point is located at each ordered pair.

- |                  |                 |                 |
|------------------|-----------------|-----------------|
| 1. (5,8) _____   | 2. (12,2) _____ | 3. (8,7) _____  |
| 4. (12,10) _____ | 5. (7,7) _____  | 6. (0,10) _____ |

Write the ordered pair for each given point.

- |             |             |             |
|-------------|-------------|-------------|
| 7. N _____  | 8. L _____  | 9. J _____  |
| 10. A _____ | 11. B _____ | 12. E _____ |

Plot the following points on the coordinate grid.

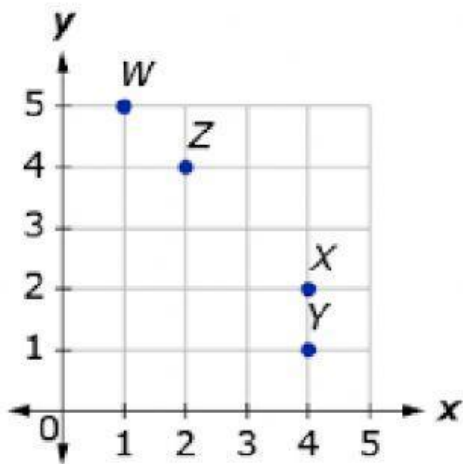
- |              |             |              |
|--------------|-------------|--------------|
| 13. S (6,11) | 14. T (3,5) | 15. U (9,12) |
|--------------|-------------|--------------|

### Questions 3

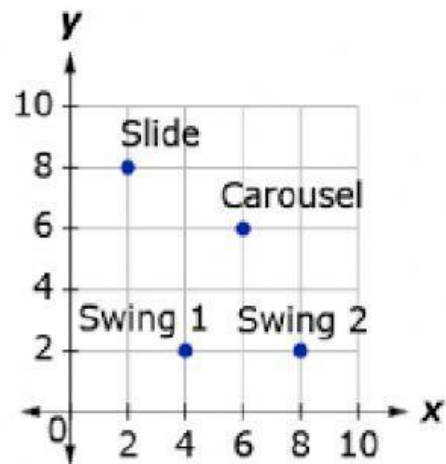
**Instructions:** Write the x-coordinate and y-coordinate for each letter/word

**X-coordinate :** First

**Y coordinate:** Second



Name	X-coordinate	y-coordinate
W		
Z		
X		
Y		



Name	X-coordinate	y-coordinate
Slide		
Carousel		
Swing 1		
Swing 2		