


Reading Analogue Scales [kilograms & grams]

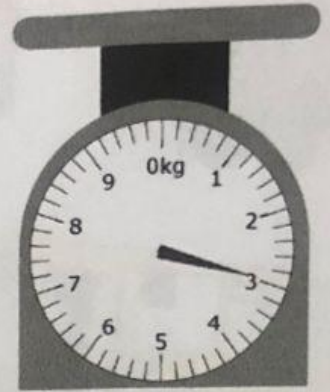
1. Read the weight each scale is showing. Record it in three different ways. The first has been done for you.



- a) 1 kilogram 600 grams
 b) 1.6 kg
 c) 1600 g



- a) ___ kilogram ___ grams
 b) _____ kg
 c) _____ g



- a) ___ kilograms ___ grams
 b) _____ kg
 c) _____ g



- a) ___ kilograms ___ grams
 b) _____ kg
 c) _____ g




- a) ___ kilograms ___ grams
 b) _____ kg
 c) _____ g




- a) ___ kilograms ___ grams
 b) _____ kg
 c) _____ g



- a) ___ kilograms ___ grams
 b) _____ kg



- a) ___ kilogram ___ grams
 b) _____ kg



- a) ___ kilograms ___ grams
 b) _____ kg