


Lesson First Grade  
Friday , December 11, 2.020

1.Count and write the sides of each shape.

1.




2.



3.



4.



5.





2.Listen and Select


Rhombus



hexagon



star



oval



triangle



square



rectangle

