

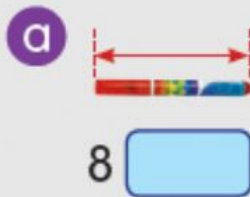





Name: \_\_\_\_\_  
Length, Mass and Volume Of Liquid.

Class: \_\_\_\_\_

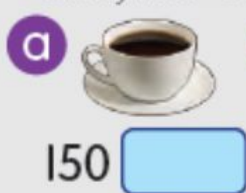
1 State the most suitable unit of length, cm or m.



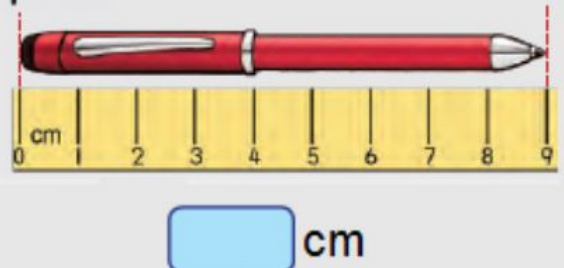
2 State a suitable mass unit, g or kg.



3 State a suitable volume unit, ml or l.



4 State the length of the pen.



5 What is the mass?



6 What is the volume?

