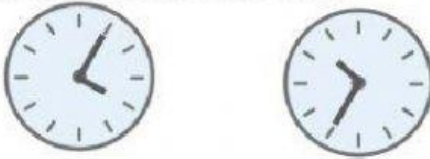



Chill & Char's Telling Time Quest

Help Chill & Char figure out which clock shows the correct time by circling the right answer!

1. Which clock shows 4:05?




2. Which clock shows 8:50?




3. Which clock shows 6:25?



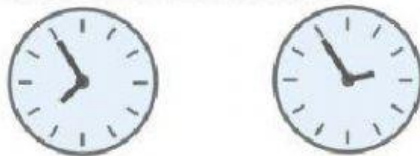
4. Which clock shows 4:45?



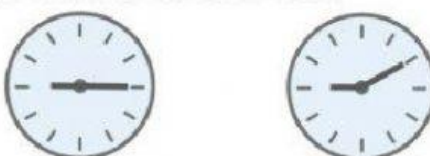
5. Which clock shows 11:15?




6. Which clock shows 7:55?




7. Which clock shows 9:10?



8. Which clock shows 1:40?



9. Which clock shows 3:30?



10. Which clock shows 2:05?



11. Which clock shows 5:15?

