

Nombre: _____

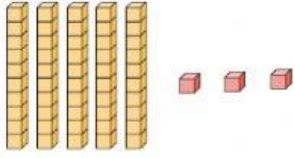
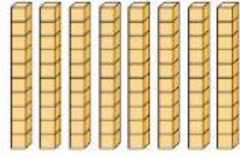
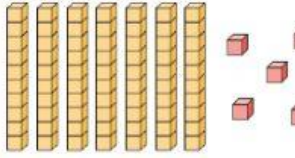
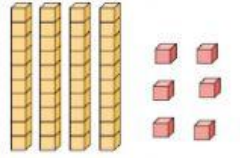
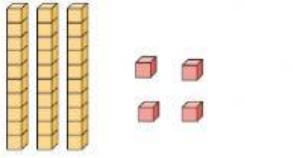
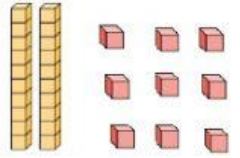

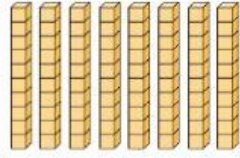
Matemáticas

Salón Recurso – EE



Destreza: Decenas y Unidades

Instrucciones: Establece la cantidad de decenas y unidades.
Luego, indica el valor del dígito con el resultado de la suma.

	
<u>5</u> D <u>3</u> U <u>50</u> + <u>3</u> = <u>53</u>	___ D ___ U + =
	
___ D ___ U + =	___ D ___ U + =
	
___ D ___ U + =	___ D ___ U + =
	
___ D ___ U + =	___ D ___ U + =

