

1-Watch these videos

1

2

2-Write: rotation or revolution.

axis

orbits

seasons

anti-clockwise

24 hours

North Pole

Sun

day and night

365 days

Northern Hemisphere

South Pole

Southern Hemisphere

3-Use the terms from the previous activity to complete the texts.

Rotation

The Earth rotates in an a _____ - _____ direction on an imaginary line called the _____ that runs from the _____ to the _____.
It takes _____ for the Earth to complete one rotation. This movement causes _____ and _____.

Revolution

The Earth also _____ the _____. It takes about _____ to complete one revolution. This movement causes the four _____. When it's summer in the _____, it's winter in the _____.





4-Choose the odd one.

a) equinox solstice axis season _____

b) summer day night hemisphere _____

c) Sun anti-clockwise axis South Pole _____

5-Write the name of the Moon in the 4 phases.

			
		W	W