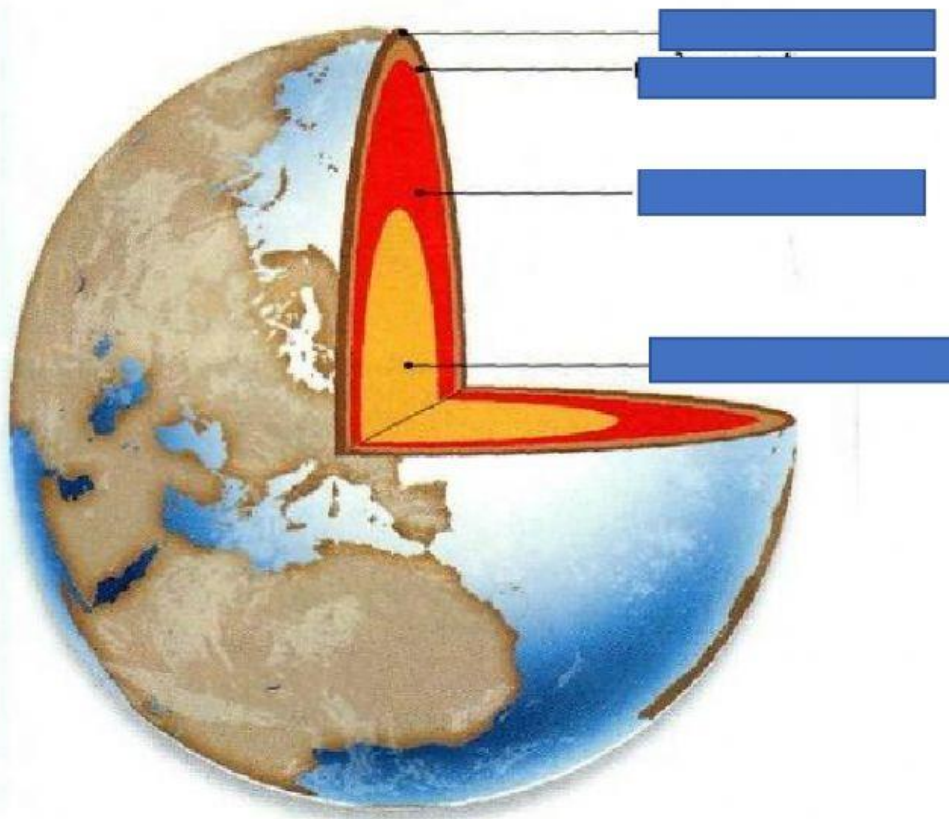


*Atividade de ciências 01.12.2020*

*Leia o capítulo II do livro e responda :*

*1- Arraste corretamente os termos a parte da estrutura da terra*






Manto

Núcleo externo


Núcleo interno

Crosta

2- Marque somente as rochas pertencentes ao grupo das rochas magmáticas



3- Marque somente as rochas pertencentes ao grupo das rochas sedimentares



4- Marque somente as rochas pertencentes ao grupo das rochas metamórficas

