



Observa, cuenta y completa.



decena y unidades

$$\boxed{10} + \boxed{6} = \boxed{16}$$


D	U



decena y unidades

$$\boxed{} + \boxed{} = \boxed{}$$


D	U



decena y unidades

$$\boxed{} + \boxed{} = \boxed{}$$

D	U



decena y unidades

$$\boxed{} + \boxed{} = \boxed{}$$

D	U