




















Lihat pictograf. Jawab soalan di bawah.

Look at the pictograph. Answer the questions below.



Jualan Pai oleh Murid 1A / Sales of Pies by Pupils 1A

Isnin Monday						
Selasa Tuesday						
Rabu Wednesday						
Khamis Thursday						
Jumaat Friday						

Setiap  mewakili 1 pai.

Each  represents 1 pie.

- 1) Jualan pai setiap hari ialah:
The number of pies sold each day is:

Isnin Monday	<input type="text"/>	Selasa Tuesday	<input type="text"/>	Rabu Wednesday	<input type="text"/>
		Khamis Thursday	<input type="text"/>	Jumaat Friday	<input type="text"/>

- 2) Pada hari apakah pai paling banyak dijual?
Which day were the most pies sold?
- 3) Pada hari apakah pai paling sedikit dijual?
Which day were the least pies sold?
- 4) Nyatakan dua hari yang mana hasil jualan mereka sama.
State two days that they sold the same number of pies.